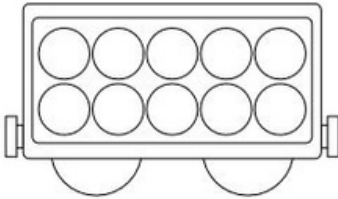
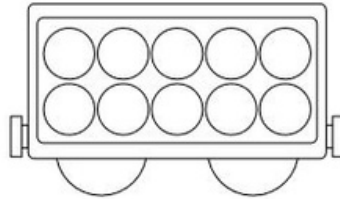


Rechnen mit dem Rechenzug

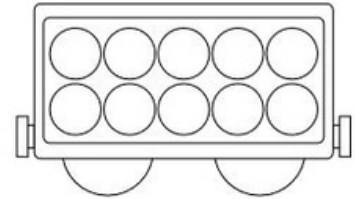
1. Male die angegebene Anzahl an Feldern aus.



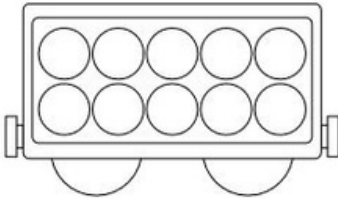
5



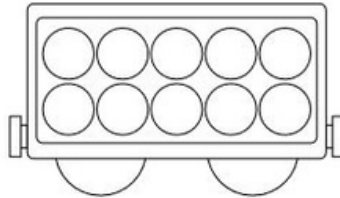
3



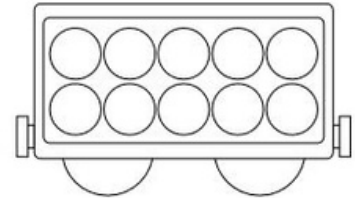
7



4

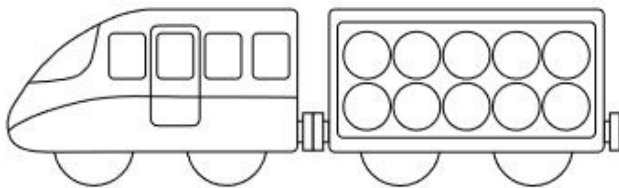


9

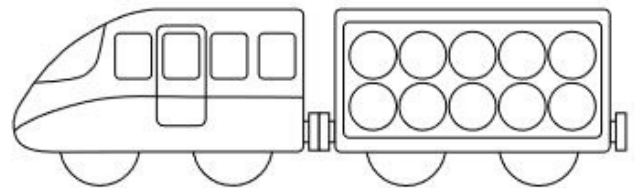


6

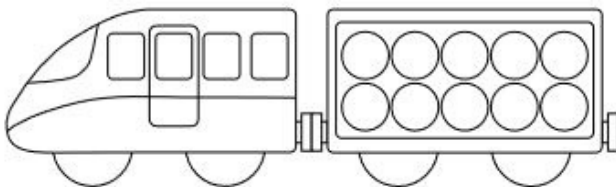
2. Zeichne die Aufgabe in den Zug ein und löse sie.



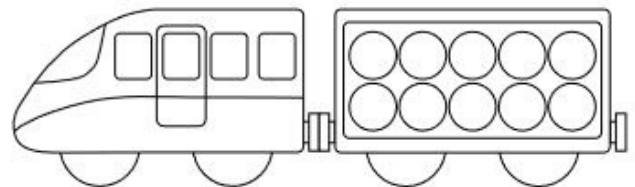
$$\boxed{2} + \boxed{2} = \boxed{}$$



$$\boxed{1} + \boxed{5} = \boxed{}$$



$$\boxed{4} + \boxed{6} = \boxed{}$$



$$\boxed{5} + \boxed{3} = \boxed{}$$